

Area -Parallelograms

Assume all units are cm.

7




__ x __

5




__ x __

6



__ x __

6




__ x __

7




__ x __

3



__ x __

4




__ x __

5




__ x __

6




__ x __

2




__ x __

6



__ x __

3



__ x __